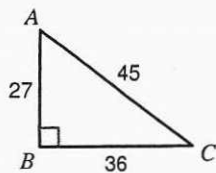


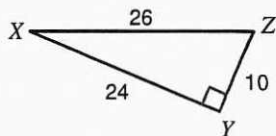
13) $\cos A$



Find each angle measure to the nearest degree.

15) $\sin A = 0.4067$

14) $\tan X$

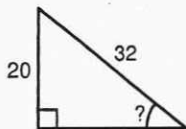


16) $\cos Z = 0.9272$

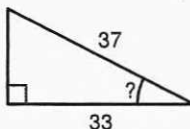
17) $\tan W = 0.1584$

Find the measure of the indicated angle to the nearest degree.

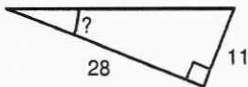
18)



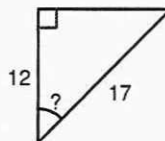
19)



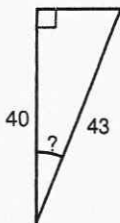
20)



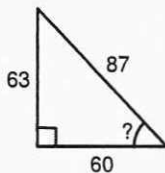
21)



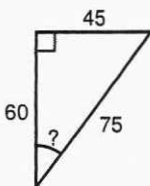
22)



23)



24)



25)

