

SOH CAH TOA

© 2011 Kuta Software LLC. All rights reserved.

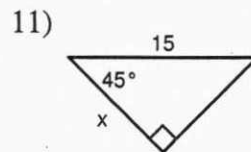
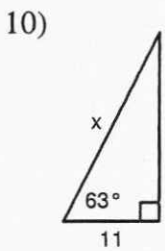
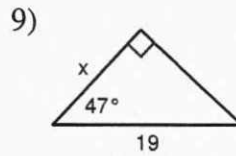
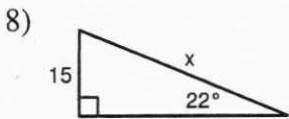
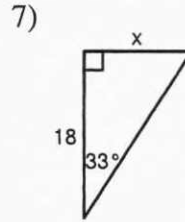
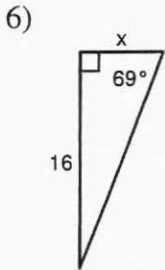
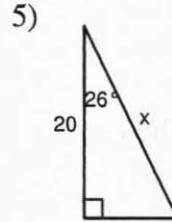
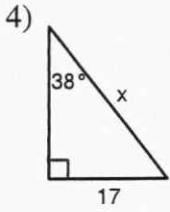
Find the value of each trigonometric ratio to the nearest ten-thousandth.

1) $\sin 16^\circ$

2) $\cos 54^\circ$

3) $\tan 88^\circ$

Find the missing side. Round to the nearest tenth.



Find the value of each trigonometric ratio.

12) $\sin X$

